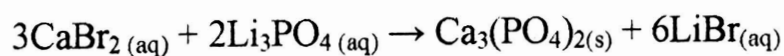


Name:

Double replacement

Predict the type of reaction for the following using your notes from the presentations:



Name:

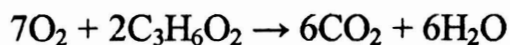
Predict the type of reaction for the following using your notes from the presentations:



Decomposition

Name:

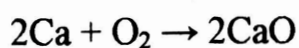
Predict the type of reaction for the following using your notes from the presentations:



Combustion

Name:

Predict the type of reaction for the following using your notes from the presentations:



Synthesis